

Name of Post:	Assistant Manager (Electrical & HR) in Assam Power Generation Corporation Limited (APGCL)
Advt. No.	11/2023 dated 25.04.2023
Date of Exam.	15.10.2023

AM/APGCL/III/23

DO NOT BE ASKED TO DO SO

Series



01025

TEST BOOKLET
Paper—II
(GENERAL STUDIES)

Time Allowed : 2 Hours

Full Marks : 100

Read the following instructions carefully before you begin to answer the questions :

1. The name of the Subject, Roll Number as mentioned in the Admission Certificate, Test Booklet No. and Series are to be written legibly and correctly in the space provided on the Answer-Sheet with Black/Blue ballpoint pen.
2. **Answer-Sheet without marking Series as mentioned above in the space provided for in the Answer-Sheet shall not be evaluated.**
3. All questions carry equal marks.

The Answer-Sheet should be submitted to the Invigilator.

Directions for giving the answers : Directions for answering questions have already been issued to the respective candidates in the 'Instructions for marking in the OMR Answer-Sheet' along with the Admit Card and Specimen Copy of the OMR Answer-Sheet.

Example :

Suppose the following question is asked :

The capital of Bangladesh is

- (A) Chennai
- (B) London
- (C) Dhaka
- (D) Dhubri

You will have four alternatives in the Answer-Sheet for your response corresponding to each question of the Test Booklet as below :



In the above illustration, if your chosen response is alternative (C), i.e., Dhaka, then the same should be marked on the Answer-Sheet by blackening the relevant circle with a Black/Blue ballpoint pen only as below :



The example shown above is the only correct method of answering.

4. Use of eraser, blade, chemical whitener fluid to rectify any response is prohibited.
5. Please ensure that the Test Booklet has the required number of pages (20) and 100 questions immediately after opening the Booklet. In case of any discrepancy, please report the same to the Invigilator.
6. No candidate shall be admitted to the Examination Hall/Room 20 minutes after the commencement of the examination.
7. **No candidate shall leave the Examination Hall/Room** without prior permission of the Supervisor/Invigilator. No candidate shall be permitted to hand over his/her Answer-Sheet and leave the Examination Hall/Room before expiry of the full time allotted for each paper.
8. No Mobile Phone, Electronic Communication Device, etc., are allowed to be carried inside the Examination Hall/Room by the candidates. Any Mobile Phone, Electronic Communication Device, etc., found in possession of the candidate inside the Examination Hall/Room, even if on off mode, shall be liable for confiscation.
9. No candidate shall have in his/her possession inside the Examination Hall/Room any book, notebook or loose paper, except his/her Admission Certificate and other connected papers permitted by the Commission.
10. Complete silence must be observed in the Examination Hall/Room. No candidate shall copy from the paper of any other candidate, or permit his/her own paper to be copied, or give, or attempt to give, or obtain, or attempt to obtain irregular assistance of any kind.
11. This Test Booklet can be carried with you after answering the questions in the prescribed Answer-Sheet.
12. Noncompliance with any of the above instructions will render a candidate liable to penalty as may be deemed fit.
13. No rough work is to be done on the OMR Answer-Sheet. You can do the rough work on the space provided in the Test Booklet.

N.B. : There will be negative marking @ 0.25 per 1 (one) mark against each wrong answer.

/5-A

[No. of Questions : 100]

SEAL

Complete the following sentences with the most appropriate options (Question Nos. 1 to 4) :

Choose the correct alternatives for the underlined portions to improve the sentences (Question Nos. 5 to 8) :

1. Neeta failed to qualify in the examination because none of her answers was _____ to the question.

- (A) directive
- (B) attended
- (C) pertinent
- (D) allusive

2. A pair of sharp scissors _____ on the table.

- (A) are lying
- (B) is lying
- (C) are laying
- (D) is laying

3. The teacher was _____ by her students because she often _____ them for not working hard enough.

- (A) respected, taunted
- (B) resented, rebuked
- (C) disrespected, eulogized
- (D) cherished, berated

4. One _____ the new scheme is that it might actually _____ just those applicants that it was intended to encourage.

- (A) feature of, attract
- (B) problem with, induce
- (C) highlight of, stimulate
- (D) drawback of, daunt

5. Rita and Ravi are staying with some friends who are owning a farm.

- (A) will be owning
- (B) own
- (C) has been owning
- (D) has owned

6. He would surely assist me if I had requested him to do so.

- (A) would have surely assisted me
- (B) would surely assisted me
- (C) will have surely assisted me
- (D) will be assisting me

7. As soon as Gautam arrived in home, he knew that something was wrong.

- (A) arrived by home
- (B) arrived home
- (C) arrive home
- (D) arrives at home

8. The thief stole the cycle which he bought yesterday.

- (A) that he bought yesterday
- (B) that he was bought yesterday
- (C) that he has bought yesterday
- (D) that he had bought yesterday

Rearrange the parts of the following sentences in correct order (Question Nos. 9 to 11) :

9. Our body takes in many toxins from

P : we eat, and we must have

Q : a process of purging these impurities

R : the atmosphere and the food

Select the correct option from the codes given below.

(A) PQR (B) RPQ

(C) QPR (D) RQP

10. The grocer

P : did not listen to protests of the customer

Q : who was in the habit of weighing-less

R : whom he had cheated

S : with great audacity

Select the correct option from the codes given below.

(A) PRSQ (B) QSPR

(C) QPRS (D) PQSR

11. When it began to rain suddenly on the first day of January

P : to celebrate the new year

Q : we ran for shelter

R : to the neighbouring house

S : where many people had gathered

Select the correct option from the codes given below.

(A) QRSP (B) PSQR

(C) PRSQ (D) QRPS

The following parts of the given sentences have errors. Identify the part with error (Question Nos. 12 to 15) :

12. Had you not reached in time
(A) (B)

we will have lost our lives.
(C) (D)

13. Mausumi sings very sweet
(A) (B)

when she is in a good mood.
(C) (D)

14. The government employees
(A)

went doors to doors in a bid to
(B) (C)

collect some data.
(D)

15. If you have loan him a book
(A)

he will lend it to someone else
(B)

and you will never get it back.
(C) (D)

Select the synonyms (Question Nos. 16 to 18) :

16. Plagiarism

- (A) Theft of funds
- (B) Theft of ideas
- (C) Belief in Gods
- (D) Arson

17. Licentious

- (A) Desire
- (B) Heal
- (C) Reluctant
- (D) Immoral

18. Reprisal

- (A) Retaliation
- (B) Reluctance
- (C) Unequivocal
- (D) Denial

Select the antonyms (Question Nos. 19 and 20) :

19. Nepotism

- (A) Impartiality
- (B) Favouritism
- (C) Legitimate
- (D) Clear

20. Illegible

- (A) Contempt
- (B) Readable
- (C) Illegal
- (D) Clear

Select the meanings of idioms and phrases (Question Nos. 21 and 22) :

21. A square peg in a round hole

- (A) A person whose character makes him unsuitable for a job
- (B) A man of importance
- (C) A man who faces stiff competition
- (D) A good bargain

22. To turn over a new leaf

- (A) To act in a foolish way
- (B) To waste time in petty things
- (C) To change one's behaviour in a positive way
- (D) To do something funny

Fill in the blanks (Question Nos. 23 to 25) :

23. If she _____ a bird, she would fly.

- (A) were
- (B) was
- (C) had been
- (D) is

24. A group of fish is called _____.

- (A) collage
- (B) school
- (C) tour
- (D) army

25. A group of dancers or performers is called _____.

- (A) troupe
- (B) troop
- (C) batch
- (D) ballet

26. A man has to reach Mumbai, which is 500 km away, in 10 hours. His starting speed for 3 hours was 60 km/hr. For the next 200 km, his speed was 50 km/hr. By what speed he must travel now so as to reach Mumbai in decided time of 10 hours?

- (A) 40 km/hr
- (B) 50 km/hr
- (C) 60 km/hr
- (D) 20 km/hr

27. P, Q and R are in a cycle race of 4500 m. P cycles twice as fast as Q. R cycles 1/3rd as fast as Q. R completes the race in 45 minutes. Then where was Q from the finishing time when P finished the race?

- (A) 300 m
- (B) 1500 m
- (C) 2250 m
- (D) 3000 m

28. A car travelling with $\frac{5}{7}$ th of its actual speed covers 42 km in 1 hour 40 minutes 48 seconds. Find the actual speed of the car.

- (A) $17\frac{6}{7}$ km/hr
- (B) 35 km/hr
- (C) 25 km/hr
- (D) 30 km/hr

29. A walks from Jammu to Delhi and at the same time B starts walking from Delhi to Jammu. After passing each other, they complete their journeys in 361 hours and 289 hours, respectively. Find out the ratio of the speed of A to that of B.

- (A) 17 : 19
- (B) 289 : 361
- (C) 361 : 289
- (D) 19 : 17

30. Rohan drives from his home at a speed of 30 km/hr and reaches his bank 20 minutes late. Then the next day he increases his speed by 15 km/hr but still he is late by 8 minutes. How far is his bank from his home?

- (A) 18 km
- (B) 35 km
- (C) 20 km
- (D) 27 km

Find out the numbers/letters from the options given below to complete the series (Question Nos. 31 to 35) :

31. 17, 13, 11, 7, 5, _____

- (A) -1
- (B) 1
- (C) 0
- (D) 2

32. _____, 18, 28, 27, 21, 36, 14

- (A) 30
- (B) 35
- (C) 23
- (D) 40

33. 4, 9, 19, 39, _____

- (A) 49
- (B) 79
- (C) 89
- (D) 59

34. 7, 11, 13, 17, 19, _____

- (A) 21
- (B) 29
- (C) 23
- (D) 31

35. KUZ, MOX, OIV, QET, _____

- (A) SDR
- (B) SUR
- (C) SAR
- (D) SMR

Complete the following analogies (Question Nos. 36 to 40) :

36. Light : Sun :: Heat : ?

- (A) Smoke
- (B) Moon
- (C) Fire
- (D) Start

37. Odometer : Mileage :: Compass : ?

- (A) Speed
- (B) Hiking
- (C) Needle
- (D) Direction

38. Optimist : Cheerful :: Pessimist : ?

- (A) Gloomy
- (B) Mean
- (C) Petty
- (D) Helpful

39. Pen : Poet :: Needle : ?

- (A) Thread
- (B) Button
- (C) Sewing
- (D) Tailor

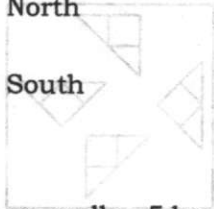
40. Exercise : Gym :: Eating : ?

- (A) Food
- (B) Dieting
- (C) Fitness
- (D) Restaurant

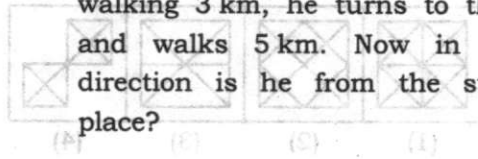
41. One morning U and V were talking to each other face-to-face at a crossing. If V 's shadow was exactly to the left of U , which direction was U facing?

- (A) East
- (B) West

- (C) North
- (D) South



42. A man walks 5 km towards south and then turns to the right. After walking 3 km, he turns to the left and walks 5 km. Now in which direction is he from the starting place?



- (A) West
- (B) South
- (C) North-West
- (D) South-West

43. Starting from the point X , J walked 15 m towards west. He turned left and walked 15 m. After this, he turned to his right and walked 12 m. How far and in which direction is now J from X ?

- (A) 32 m, South
- (B) 47 m, East
- (C) 42 m, North
- (D) 27 m, South

44. A boy rode his bicycle northward, then turned left and rode 1 km and again turned left and rode 2 km. He found himself 1 km west of his starting point. How far did he ride northward initially?

- (A) 1 km
- (B) 2 km
- (C) 3 km
- (D) 5 km

45. Some boys are sitting in three rows, all facing north, such that A is in the middle row, P is just to the right of A but in the same row, Q is just behind P while R is in the north of A . In which direction of R is Q ?

- (A) South
- (B) South-West
- (C) North-West
- (D) South-East

46. A picture is copied into a sheet of paper 8.5 inches by 10 inches. A 1.5 inches margin is left all around. What area in square inches does the picture cover?

- (A) 76
- (B) 35
- (C) 49
- (D) 38.5

47. A cube is painted blue on two adjacent surfaces and black on the surfaces opposite to blue surfaces and green on the remaining surfaces. Now the cube is cut into 216 smaller cubes of equal sizes. Find the number of cubes with no surface painted.

- (A) 56
- (B) 48
- (C) 32
- (D) 64

48. A dice is numbered from 1 to 6 in different ways. If 1 is adjacent to 2, 4, and 6, then which of the following statements is necessarily **true**?

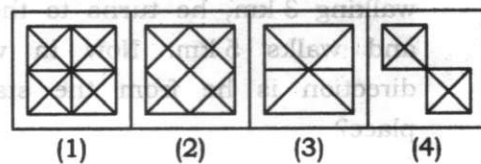
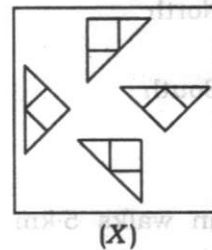
- (A) 2 is opposite to 6.
- (B) 1 is adjacent to 3.
- (C) 3 is adjacent to 5.
- (D) 3 is opposite to 5.

49. Find the number of triangles in the figure given below :



- (A) 5
- (B) 8
- (C) 9
- (D) 10

50. Find out the figure from (1), (2), (3) and (4) that can be formed from the pieces given in the figure (X) :



- (A) 1
- (B) 4
- (C) 3
- (D) 2

51. In refining Cannon's work, which of the following are people's reaction to threat?

- (A) Fight, flight, fumble, fix
- (B) Fight, flight, forget, fix
- (C) Fight, flight, freeze, fawn
- (D) Fight, flight, freeze, fumble

52. Mixed models of emotional intelligence combine mental capacity with

- (A) intelligence quotient
- (B) personality traits
- (C) intrinsic motivation
- (D) learned behaviour

53. Which of the following models of emotional intelligence is specifically designed for the workspace?

- (A) The Gregor model of EI
- (B) The Jensen model of EI
- (C) The Genos model of EI
- (D) The Graham model of EI

54. The emotional flavour of dry facts is retained by

- (A) thalamus
- (B) hippocampus
- (C) amygdala
- (D) hypothalamus

55. The Bar-On model comprises which of the following domains?

- (A) Self-awareness, assertiveness, independence, self-regard and self-actualization
- (B) Stress tolerance, impulse control, optimism and happiness
- (C) Stress management, intra-personal, inter-personal, adaptability and general mood
- (D) Intra-personal, stress tolerance, assertiveness, optimism and empathy

56. The MSCEIT is a unique self-report tool, because

- (A) it has no right or wrong answers
- (B) it is not a self-report measure
- (C) it has right or wrong answers
- (D) it has no right or wrong answers but it is a self-report measure

57. The latest edition of DSM is

- (A) DSM-5-TR
- (B) DSM-5-NR
- (C) DSM-5-XB
- (D) DSM-5-BR

58. A disorder is a medical condition that may or may not give rise to a disability depending on its severity. This statement is

- (A) false
- (B) true
- (C) partially true
- (D) None of the above

59. Identify which is **not** a personality disorder.

- (A) Dependent personality disorder
- (B) Schizophrenic personality disorder
- (C) Avoidant personality disorder
- (D) Histrionic personality disorder

60. The word 'spectrum' in autism spectrum disorder signifies

- (A) heterogeneity in the presentation and severity of symptoms
- (B) childhood related fixed symptoms
- (C) uniform symptoms detected in early childhood
- (D) homogeneity in the severity of the symptoms

61. Emotional intelligence

- (A) is unifactorial
- (B) is bi-factorial
- (C) is multifactorial
- (D) has no factor

62. Emotional intelligence is the 'sine qua non' of leadership. This view was put forward by

- (A) David Caruso
- (B) Daniel Goleman
- (C) Peter Salovey
- (D) John Mayer

63. Cluster C of the personality disorder is best described as

- (A) odd and eccentric
- (B) dramatic and emotional
- (C) anxious and fearful
- (D) erratic and volatile

64. According to Gardner's influential book, *Frames of Mind*, the kind of intelligence that will be displayed by Mallika Sarabhai is

- (A) fluid
- (B) kinesthetic
- (C) crystal
- (D) spacial

65. Hot intelligence processes information pertaining to
- verbal-propositional intelligence
 - visual-spatial intelligence
 - emotional well-being
 - math intelligence
66. The Big Five personality traits are
- aggression, extraversion, agreeableness, openness, neuroticism
 - conscientiousness, openness, aggression, neuroticism, humility
 - extraversion, agreeableness, openness, conscientiousness, neuroticism
 - conscientiousness, humility, openness, passive aggression, neuroticism
67. The mixed model of emotional intelligence comprises of two models. They are
- Bar-On's model and Trait model
 - Trait model and Goleman's performance model
 - Bar-On's model and Goleman's performance model
 - All of the above are incorrect
68. Autism spectrum disorder and intellectual disability are the terms used interchangeably by a psychologist. This statement is
- correct
 - incorrect
 - partially correct
 - dependent on the context of use
69. Which leaders are most likely to make use of their IQ in their leadership style?
- Visionary
 - Coaching
 - Affiliative
 - All of the above
70. Multiple personality disorder is now known as
- dissociative identity disorder
 - dissociative personality disorder
 - multiple identity disorder
 - dissociative fugue
71. A standardized test may be reliable but may not be valid. This statement is
- correct
 - incorrect
 - partially correct
 - dependent on the variable

72. Differentiated from IQ, these skills rely much more on emotional intelligence, sometimes referred to as EI or EQ. These skills are known as

- (A) hard skills
- (B) soft skills
- (C) both hard and soft skills
- (D) None of the above

73. Competence is best described as

- (A) training
- (B) knowledge
- (C) ability
- (D) All of the above

74. Research has documented a positive association between emotional intelligence and well-being (Zeidner *et al.*). This implies

- (A) increase in EI leads to increase in well-being
- (B) decrease in EI leads to decrease in well-being
- (C) Both (A) and (B) are correct
- (D) (A) is correct but (B) is incorrect

75. Repetitive motor movements, lining up of toys, echolalia, flipping objects are the typical symptoms of

- (A) obsessive compulsive disorder
- (B) autism spectrum disorder
- (C) associative disorder
- (D) Broca's aphasia

76. Which of the following statements is/are **true** regarding the North Atlantic Treaty Organization (NATO)?

- (i) Sweden became the 32nd member of NATO in 2023.
- (ii) Finland became the 31st member of NATO in 2023.
- (iii) Ukraine became the 32nd member of NATO in 2023.
- (iv) There was no new NATO member admitted in the first half of 2023.

Select the correct answer using the codes given below.

- (A) (i) and (ii)
- (B) (ii) and (iii)
- (C) (ii) only
- (D) (iv)

77. Which of the following statements is/are **false** regarding New Jalpaiguri-Guwahati Vande Bharat Express train?

- (i) It runs from New Jalpaiguri in West Bengal to Guwahati of Assam.
- (ii) It is the first Vande Bharat Express train to be launched in North-East India.
- (iii) It operates 6 days in a week.
- (iv) It has sleeping facilities.

Select the correct answer using the codes given below.

- (A) (i) and (ii)
- (B) (ii) and (iv)
- (C) (iii)
- (D) (iv) only

78. Which of the following statements are **true** about the ethnic violence that occurred in Manipur in 2023?

- (i) It was primarily a series of ethnic clashes between the Meitei and Kuki communities of Manipur.
- (ii) The main cause of the violence was the demand for scheduled tribe status by the Meitei community.
- (iii) President's Rule was imposed on Manipur by 30th May, 2023 to bring order to the State.
- (iv) The violence of Manipur has spread to Nagaland and President's Rule has been imposed on Nagaland too.

Select the correct answer using the codes given below.

- (A) (i) and (ii) only
- (B) (i), (ii) and (iii)
- (C) (i), (iii) and (iv)
- (D) (i) and (iii) only

79. Which of the following statements are **true** about the Himalayan town of Joshimath that has been in the news recently?

- (i) It is located in Himachal Pradesh.
- (ii) The region where it is located had been affected by flash flood due to a section of the Nanda Devi Glacier breaking off in 2021.
- (iii) The town is sinking into the ground due to land subsidence and buildings have been heavily damaged.
- (iv) It is the home to one of the four cardinal maths or monasteries established by Adi Shankaracharya.

Select the correct answer using the codes given below.

- (A) (i), (ii) and (iii)
- (B) (i), (ii) and (iv)
- (C) (ii), (iii) and (iv)
- (D) (ii) and (iii) only

80. Match the following Cabinet Ministers of Assam to their respective portfolios in June 2023 :

Cabinet Minister of Assam	Respective portfolio
a. Ranoo Pegu	1. Finance
b. Ashok Singhal	2. Education
c. Ajanta Neog	3. Agriculture and Horticulture
d. Atul Bora	4. Irrigation

Select the correct answer using the codes given below.

- (A) a b c d
 3 4 2 1
- (B) a b c d
 4 1 2 3
- (C) a b c d
 2 4 1 3
- (D) a b c d
 4 3 2 1

81. Who among the following Indian cricketers were in the playing XI for the World Test Championship Final against Australia played at the Oval, London?

- (i) Shubman Gill
- (ii) Ravichandran Ashwin
- (iii) Ravindra Jadeja
- (iv) Shardul Thakur

Select the correct answer using the codes given below.

- (A) (i), (ii) and (iii) only
- (B) (i), (iii) and (iv) only
- (C) (ii), (iii) and (iv) only
- (D) (i), (ii), (iii) and (iv)

82. Match the following CEOs to their companies :

CEO	Company
a. Elon Musk	1. Wipro
b. Sam Altman	2. Adobe
c. Shantanu Narayen	3. Tesla
d. Thierry Delaporte	4. OpenAI

Select the correct answer using the codes given below.

- (A) a b c d
3 4 2 1
- (B) a b c d
3 2 1 4
- (C) a b c d
3 1 4 2
- (D) a b c d
3 2 4 1

83. Match the following people to their respective positions (as on August 2023) :

Name	Designation
a. Manoj Soni	1. Governor, RBI
b. Shaktikanta Das	2. Chairman, UPSC
c. Ashok Kumar Kaluaram Meena	3. Director, CBI
d. Praveen Sood	4. Chairman and MD, FCI

Select the correct answer using the codes given below.

- (A) a b c d
4 1 2 3
- (B) a b c d
2 1 4 3
- (C) a b c d
3 2 1 4
- (D) a b c d
3 1 2 4

84. Match the following players to the sports they are associated with :

Name	Sports
a. Ashmita Chaliha	1. Football
b. Bhogeswar Baruah	2. Athletics
c. Durga Boro	3. Badminton
d. Shiva Thapa	4. Boxing

Select the correct answer using the codes given below.

- (A) a b c d
1 2 3 4
- (B) a b c d
2 3 4 1
- (C) a b c d
3 4 1 2
- (D) a b c d
3 2 1 4

85. In which among the following sports can referee/officials issue Yellow Cards for cautioning players?

- (i) Badminton
- (ii) Equestrian
- (iii) Racewalking
- (iv) Table Tennis

Select the correct answer using the codes given below.

- (A) None of the above
- (B) (i), (iii) and (iv) only
- (C) (ii), (iii) and (iv) only
- (D) All of the above

86. Match the following books to their authors :

Book	Author
a. <i>Aatmanusandhan</i>	1. Birendra Kumar Bhattacharya
b. <i>Asimat Jar Herat Seema</i>	2. Homen Borgohain
c. <i>Iyaruangam</i>	3. Syed Abdul Malik
d. <i>Dhanya Nara Tanu Bhal</i>	4. Kanchan Baruah

Select the correct answer using the codes given below.

- (A) a b c d
 1 2 3 4
- (B) a b c d
 2 4 1 3
- (C) a b c d
 3 4 1 2
- (D) a b c d
 4 1 2 3

87. Consider the following statements :

- (i) The *Bible* is the best-selling book of all time.
- (ii) *The Lord of the Rings* is the best-selling book series of all time.

Select the correct answer using the codes given below.

- (A) Both (i) and (ii) are true
- (B) (i) is true and (ii) is false
- (C) (i) is false and (ii) is true
- (D) Both (i) and (ii) are false

88. Which of the following Assamese writers have been awarded the prestigious Jnanpith Award?

- (i) Nilmani Phukan
- (ii) Mamoni Raisom Goswami
- (iii) Homen Borgohain
- (iv) Birendra Kumar Bhattacharya

Select the correct answer using the codes given below.

- (A) (i), (ii) and (iii)
- (B) (i), (ii) and (iv)
- (C) (i), (iii) and (iv)
- (D) (ii), (iii) and (iv)

89. Which of the following movies was India's official entry to the Academy Awards, 2023?

- (A) RRR
- (B) *The Elephant Whisperers*
- (C) *Chhello Show*
- (D) *Sardar Udham*

90. Match the following international recognitions to the respective fields they are associated with :

- | | |
|------------------------------|---|
| a. The Ramon Magsaysay Award | 1. Mathematics |
| b. The Fields Medal | 2. Novel and Short stories |
| c. The Pulitzer Prize | 3. Governance, Leadership, Public service |
| d. The Hugo Award | 4. Journalism |

Select the correct answer using the codes given below.

- (A) a b c d
 3 1 4 2
- (B) a b c d
 2 1 4 3
- (C) a b c d
 3 1 2 4
- (D) a b c d
 1 2 3 4

91. Which of the following awards were won by Biju Patnaik, the great freedom fighter and politician from Odisha?

- (i) Order of Lenin, the highest civilian award of Soviet Union
- (ii) Bharat Ratna, the highest civilian award of India
- (iii) Bintang Jasa Utama, the highest civilian award of Indonesia
- (iv) Ramon Magsaysay Award

Select the correct answer using the codes given below.

- (A) (i) and (ii)
- (B) (i) and (iii)
- (C) (i) and (iv)
- (D) (ii) and (iv)

92. What does the GPT stand for in ChatGPT?

- (A) General Purpose Trainee
- (B) Generated Programmable Transformer
- (C) Generate Program Train
- (D) Generative Pre-trained Transformer

93. Lithium reserves were newly discovered in which of the following places in India?

- (i) Reasi, Jammu and Kashmir
- (ii) Chatrapur, Odisha
- (iii) Domiasiat, Meghalaya
- (iv) Degana, Rajasthan

Select the correct answer using the codes given below.

- (A) (i) and (ii)
- (B) (i) and (iv)
- (C) (ii) and (iii)
- (D) (iii) and (iv)

94. Which among the following is the largest solar energy farm in the world?

- (A) Bhadla Solar Park, Rajasthan, India
- (B) Huanghe Hydropower Hainan Solar Park, Qinghai Province, China
- (C) Benban Solar Park, Aswan Governorate, Egypt
- (D) Solar Star, California, United States of America

95. Which of the following statements about ISRO is **false**?

- (i) Sreedhara Panicker Somanath is the current Chairman of ISRO.
- (ii) The Chandrayaan-3 mission was planned for launch within the window for July 12 to July 19 of 2023.
- (iii) The launch took place from Sriharikota.
- (iv) The Chandrayaan-3 is a joint collaboration between ISRO and the Russian space agency, Roscosmos.

Select the correct answer using the codes given below.

- (A) (i)
- (B) (ii)
- (C) (iii)
- (D) (iv)

96. Match the following days to their dates :

Day	Date
a. International Women's Day	1. May 1
b. International Yoga Day	2. June 5
c. World Environment Day	3. June 21
d. International Labour Day	4. March 8

Select the correct answer using the codes given below.

- (A) a b c d
3 2 4 1
- (B) a b c d
4 3 2 1
- (C) a b c d
2 3 1 4
- (D) a b c d
1 2 3 4

97. Which of the following statements are **true**?

(i) Children's Day in India is celebrated in November 14.

(ii) The World Children's Day takes place in November 20.

(iii) In India, November 14 marks the birthday of Pandit Jawaharlal Nehru.

(iv) November 20 is significant because it marks the day of adoption of the Declaration of the Rights of the Child by the United Nations in 1959.

Select the correct answer using the codes given below.

(A) (i) and (ii) only

(B) (i), (ii) and (iii) only

(C) (i), (iii) and (iv) only

(D) (i), (ii), (iii) and (iv)

98. Which of the following statements is **false** regarding Vijay Divas?

(A) It takes place on 17 December.

(B) It marks the day of surrender by Pakistani troops in the Indo-Pak War of 1971.

(C) It is also commemorated in Bangladesh as Bijoy Dibos.

(D) The day is marked by paying tribute to the armed forces for their contributions to maintain peace and national security.

99. Match the following days to their dates :

Day	Date
a. Me-Dam-Me-Phi	1. 17 January
b. Rabha Divas	2. 31 January
c. Silpi Divas	3. 24 November
d. Lachit Divas	4. 20 June

Select the correct answer using the codes given below.

(A) a b c d
2 4 1 3

(B) a b c d
2 3 1 4

(C) a b c d
3 1 4 2

(D) a b c d
4 3 2 1

100. Match the following persons with the fields they are known for :

Name of persons	Field
a. Jatin Goswami	1. Classical singing
b. Parveen Sultana	2. Filmmaking/ Direction
c. Dipak Sarma	3. Sattriya dance
d. Jahnü Barua	4. Flute playing

Select the correct answer using the codes given below.

(A) a b c d
3 1 4 2

(B) a b c d
1 2 3 4

(C) a b c d
2 3 4 1

(D) a b c d
3 4 1 2

SPACE FOR ROUGH WORK

SPACE FOR ROUGH WORK

SEAL

AM/APGCL/III/23/5-A

20

A-2188/III 24T-350x4